


START YOUR MORNINGS OFF RIGHT

Easily train your students to work for the first 10 minutes of the day on spiral review problems!

Week 1

Practice writing the letter "G"
GGGGGGGGGG
gggggggggg


Change each verb from present to past tense.
played
walked
jumped

Circle all the words that have a "ch" digraph.


Add apostrophes to correct the sentence.
2 corrections
Gina's room is clean and Gerry's room is not.

Complete the pattern.
5 10 15 20 25 30 35
What was the pattern?
Adding 5

Solve the problems.
 $45 + 10 = 55$
 $236 - 100 = 136$
 $108 + 10 = 118$

Which tool would be best for measuring the length of a pencil?

ruler
yardstick
scale

Finished Early? Write as many pie flavors as you can think of.
apple pumpkin key lime
cherry pecan chocolate

OCTOBER SCOPE & SEQUENCE

Each week
has new skills for:

- ★ Phonemic Awareness
- ★ Phonics
- ★ Language
- ★ Number Sense
- ★ Geometry
- ★ Operations (Word Problems)

November
Early 2nd Grade Skills

	Week 1	Week 2	Week 3	Week 4
Phonics	Common digraphs (ch, sh, th, wh, ph) RF.1.3.A	Common digraphs (ch, sh, th, wh, ph) RF.1.3.A	Long vs. short vowel sounds RF.2.3.A	Long vs. short vowel sounds RF.2.3.A
Language (Conventions)	Using apostrophes (possessives) L.2.2.C	Possessive pronouns L.1.1.D	Using apostrophes (contractions v. possessives) L.2.2.C	Using apostrophes (contractions v. possessives) L.2.2.C
Grammar	Verbs (past, present, future review) L.1.1.E	Irregular verbs L.2.1.D	Irregular verbs L.2.1.D	Irregular verbs L.2.1.D
Number Sense	Skip counting (5s, 10s, 100s) 2.NBT.A.2	Skip counting (5s, 10s, 100s) 2.NBT.A.2	Number forms (standard, word, expanded) 2.NBT.A.3	Number forms (standard, word, expanded) 2.NBT.A.3
Geometry & Measurement	Measuring length (appropriate tools) 2.MD.A.1	Measuring length (different units) 2.MD.A.1	Measuring length (different units) 2.MD.A.1	Measuring length (different units) 2.MD.A.1
Operations (Equations & Word Problems)	Mental addition/ subtraction (10s & 100s) 2.NBT.B.8	Mental addition/ subtraction (10s & 100s) 2.NBT.B.8	Mental addition/ subtraction (10s & 100s) 2.NBT.B.8	Mental addition/ subtraction (10s & 100s) 2.NBT.B.8

**ALIGNED TO
2ND GRADE
COMMON CORE
STANDARDS**

YOU GET...


20 PAGES + 2 REVIEW


You get 4 weeks worth of review pages with 5 pages per week.

There are 2 review pages that you can add for longer months or as an assessment!

Review 1 Practice writing your favorite color.

Complete each word by adding the correct digraph.

 ark _____

 too _____

Write the past tense form of each irregular verb.

drink _____

break _____

Add and remove apostrophes to correct the sentence.

2 corrections

Stevens dad walk's to school every day.


Estimate the length of an item in inches. Then measure the item. Find the difference between the two.


Item	Estimated length	Length in inches	Difference
			-

Solve the problem.

Review 2 Practice writing your favorite book character.

Complete each word by adding the correct digraph.

 ear _____

 est _____

Write the past tense form of each irregular verb.

feel _____

fight _____

bring _____

Add and remove apostrophes to correct the sentence.

2 corrections

Angela often play's soccer in Jennas yard.

Complete the pattern.

5 _____ 35 _____

What was the pattern?

Estimate the length of an item in the room in inches. Then measure the item. Find the difference between the two.

Item	Estimated length	Length in inches	Difference
			- =

Solve the problem. **248**

ANSWER KEYS ARE INCLUDED TOO!

EACH PAGE HAS A FRIENDLY OPENER

Success for all students with:

- ★ Assessing the weather
- ★ Social Emotional Feelings Check-In
- ★ Brushing up on their Penmanship

Week 1 How's the weather? sunny cloudy raining snowing lightning foggy

Circle all the words that have the same sound as the word in the box below.

hoped hoped
lived lived
lookt looked

Week 1 How are you feeling today? happy sad tired angry sick silly

Write at least three words that begin with the digraph.

Fill in the chart with the missing verb tense.

Past	Present	Future
	talk	will watch
kicked	type	will show

was the pattern?
40 _____
the problems.
2 - 10 = _____

Week 1 Practice writing the letter "K"

Which digraph do all the items have?

Use the correct verb tense to complete the sentence.

Olivia
how to tie her shoes last week.

Complete the pattern.

50 _____ 40 _____ 25

What was the pattern?

Circle the item that would be best measured with a ruler.

Solve the problem.

Deja counts that she has 34 dolls. She decides to give 10 away to charity. How many dolls does Deja have left?


3 ELA PROBLEMS


Students practice the same skill for 5 days!

Week 3 How are you feeling today?


happy sad tired angry sick silly

Decide if each word has a long or a short vowel sound.

 long
 short

 long
 short

Circle the correct past tense form of the irregular verb.



rided road rode

Add or remove apostrophes and rewrite the sentence correctly.

Aces socks' had holes in them.

Write the number in word form.

85

Inches and centimeters. Then find the difference between the two.

Item		
Length in inches		
Length in cm		
Difference	-	=

Solve the problem.

Kareem loves to read. This weekend, he read 136 pages of his book. During the week, he read 403 pages. How many pages did Kareem read altogether?

_____ pages

Finished Early?
List as many things as you can think of that start with the letter "Q".

© 2014 by Mrs. Christine J. Fletcher-Proctor

ELA focuses on:

- ✓ Phonemic Awareness
- ✓ Phonics
- ✓ Language


3 MATH PROBLEMS


Students practice the same skill for 5 days!

Week 3 Practice writing the letter "Q"


q

Decide if each word has a long or a short vowel sound.

 long
 short

 long
 short

Circle the correct past tense form of the irregular verb.



built builded build

Add or remove apostrophes and rewrite the sentence correctly.

The trees leaves' rustled in the wind.

Write the number in standard form.

700 + 10 + 8

Measure an item in the room using inches and centimeters. Then find the difference between the two.

Item		
Length in inches		
Length in cm		
Difference	-	=

_____ minutes

Solve the problem.

Tina runs every day. On Monday she runs for 65 minutes, and on Tuesday, she runs for 33 minutes. How many minutes did she run in the two days?

_____ minutes









Finished Early?
Write as many things that are usually brown as you can think of.

© 2014 by Mrs. Chapman | TeachersPayTeachers.com

Math focuses on:

- ✓ Number Sense
- ✓ Geometry
- ✓ Operations (including word problems)

EARLY FINISHERS WILL STILL STAY BUSY

Week 2	How are you feeling today?						
	happy	sad	tired	angry	sick	silly	
Write at least three words that end in the "ck" digraph.	Circle the correct past tense form of the irregular verb.						
							
	swum swimmmed swam						
Rewrite the sentence with the correct possessive pronoun.	Count the tally marks using skip counting.						
I grabbed _____ coat from the rack.							
_____	<input type="text"/>						

Measure the top of a table or desk in the room in inches and centimeters.	Solve the problems.						
_____ inches	$19 + 30 =$						
_____ centimeters	$605 - 200 =$						
	$78 - 40 =$						
Finished Early? List as many things as you can think of that are usually purple.							

Every page has:

Finished Early questions are on every page! Students will be asked to list or draw. It's fun but promotes higher level thinking!