

START YOUR MORNINGS OFF RIGHT

Easily train your students to work for the first 10 minutes of the day on spiral review problems!

Week 1

How's the weather?

sunny cloudy raining snowing lightning foggy

Match each word to the correct vowel sound.

long short

Combine the two words into a contraction.

he + is = he's
have + not = haven't
will + not = won't

Add details (at least two) to expand the simple sentence.

They went to the park.

They happily went to the park to play.

Complete the pattern.

5 15 25 35 45 55

What was the pattern?

plus 10

Draw lines that would split the trapezoid into three triangles.

Solve the problems.

$37 + 10 = 47$
 $985 - 100 = 885$
 $126 + 110 = 236$

Finished Early?
List as many things as you can think of that begin with the first letter of your name.

rabbit race robot
raccoon red rain boots ribbon
river rainbow

MAY SCOPE & SEQUENCE

Each week
has new skills for:

- ★ Phonemic Awareness
- ★ Phonics
- ★ Language
- ★ Number Sense
- ★ Geometry
- ★ Operations (Word Problems)

May
Review of 2nd Grade Skills

	Week 1	Week 2	Week 3	Week 4
Phonics	Long vs. Short Vowels Review RF.2.3.A	Common Long Vowel Teams Review RF.1.3.C/RF.2.3.B	Common Prefixes & Suffixes Review RF.2.3.D	Common Prefixes & Suffixes Review RF.2.3.D
Language (Conventions)	Apostrophes Review (contractions) L.2.2.C	Spelling Patterns Review L.2.2.D	Compound Words Review L.2.4.D	Context Clues Review L.2.4.A
Grammar	Simple & Compound Sentences Review L.2.1.F	Simple & Compound Sentences Review L.2.1.F	Simple & Compound Sentences Review L.2.1.F	Simple & Compound Sentences Review L.2.1.F
Number Sense	Skip Counting Review 2.NBT.A.2	Objects in Arrays Review 2.O.A.C.4	Writing/Decomposing Three-Digit #s Review 2.NBT.A.1/2.NBT.A.3	Adding Multiple Addends Review 2.NBT.B.6
Geometry & Measurement	Shapes Review 2.G.A.1-3	Measurement Review 2.MD		
Operations (Equations & Word Problems)	Mental Addition/Subtraction Review 2.NBT.B.8			

**ALIGNED TO
2ND GRADE
COMMON CORE
STANDARDS**

YOU GET...

20 PAGES + 2 REVIEW


You get 4 weeks worth of review pages with 5 pages per week.


There are 2 review pages that you can add for longer months or as an assessment!

Review 1 Practice writing the letter "S"

S _____
S _____

Write the long vowel word that matches each picture.

 _____

 _____

Write three contractions for each word.

+ not + will

Add details (at least 1) to expand the simple sentence.

I would like a piece of _____

Create a line plot

FAVORITE HOLIDAY	
VALENTINE'S DAY	
EASTER	THL
4 th OF JULY	
HALLOWEEN	THL
CHRISTMAS	THL

Solve the problem. Show your work.

$$52 + 34 + 13$$

Review 2 Practice writing the letter "P"



P _____
P _____

Use context clues to fill in the correct suffix to complete the sentence.

ful less

Raya grew rest _____ in class watching the snow fall outside. She couldn't wait for recess to start.

Put the two images together to create a compound word.

 +  _____

Create a compound sentence from the two independent clauses. Circle the conjunction.

Marta wants to do well on the test. She studies hard.

Write the three-digit number in expanded form.

867

Create a bar graph based on the information in the table.

FAVORITE HOLIDAY	
VALENTINE'S DAY	
EASTER	THL
4 th OF JULY	
HALLOWEEN	THL
CHRISTMAS	THL

Solve the problem. Show your work.

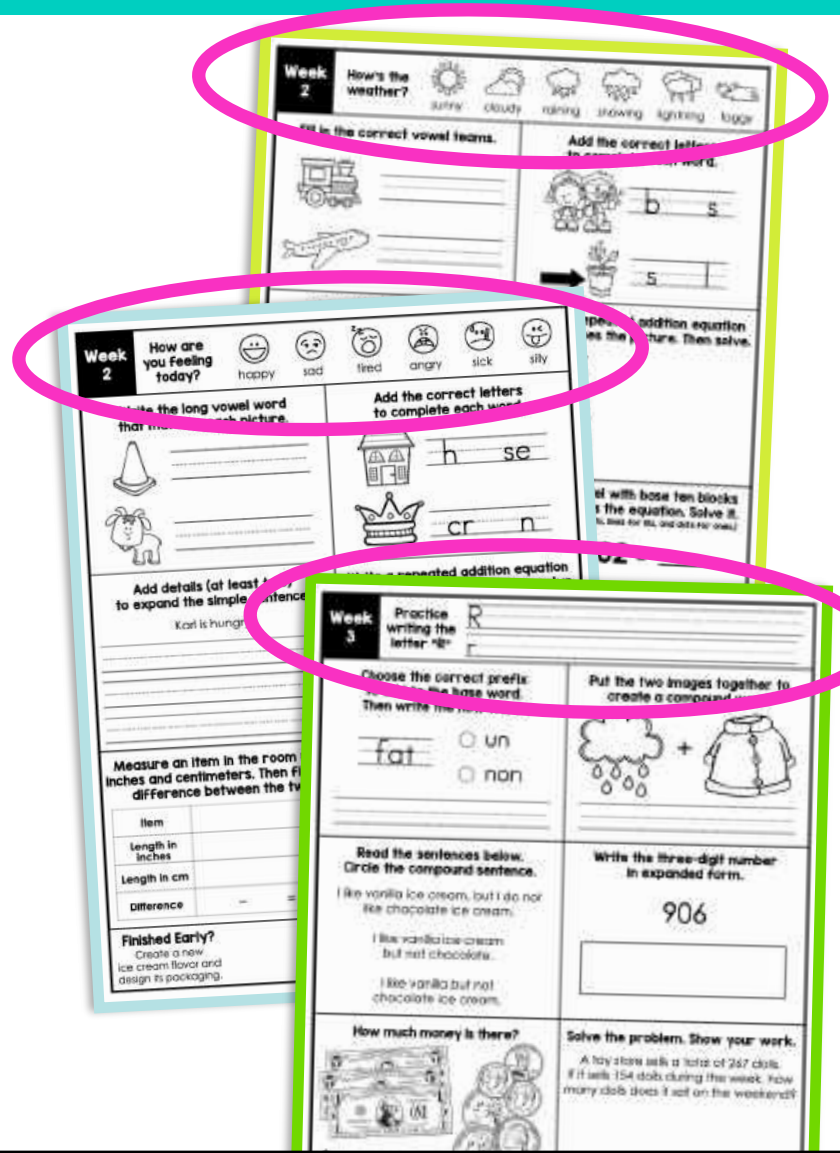
Julian has 2 dollar bills, 6 quarters, 3 dimes, 7 nickels and 2 pennies in his pocket. How much money does he have?

**ANSWER
KEYS ARE
INCLUDED
TOO!**

EACH PAGE HAS A FRIENDLY OPENER

Success for all students with:

- ★ Assessing the weather
- ★ Social Emotional Feelings Check-In
- ★ Brushing up on their Penmanship




3 ELA PROBLEMS


Students practice the same skill for 5 days!

Week 2 How are you feeling today?


happy sad tired angry sick silly


Write the long vowel word that matches each picture.

 _____

 _____

Add the correct letters to complete each word.


 h se

 cr n

Add details (at least two) to expand the simple sentence.

Karl is hungry.

Write a repeated addition equation that matches the picture. Then solve.



Draw a model with base ten blocks that matches the equation. Solve it.
(Use squares for 100s, lines for 10s, and dots for ones.)

$284 + 109 = \underline{\quad}$

inches and centimeters. Then find the difference between the two.

Item	
Length in inches	
Length in cm	
Difference	— =

Finished Early?
Create a new ice cream flavor and design its packaging.

ELA focuses on:

- ✓ Phonemic Awareness
- ✓ Phonics
- ✓ Language

3 MATH PROBLEMS

Students practice the same skill for 5 days!

Week 4 How are you feeling today?

happy sad tired angry sick silly

Use context clues to fill in the correct suffix to complete the sentence.
 able ly

Gazing at the stars is a love_____ way to spend an evening.

Use context clues to figure out the meaning of the underlined word.
The stray kittens found shelter from the snowstorm underneath the porch.

Create a compound sentence from the two independent clauses. Circle the conjunction.
We can go to the park.
We can go to the beach.

Solve the problem. Show your work.

$$12 + 67 + 34 = \underline{\quad}$$

Answer the questions based on the information in the graph.

Minutes of Reading

X	X	X	X
X	X	X	X
X	X	X	X
X	X	X	X
X	X	X	X
X	X	X	X
X	X	X	X
X	X	X	X
X	X	X	X
X	X	X	X

How many students read for 20 or more minutes?

Solve the problem. Show your work.

$$\begin{array}{r} 442 \\ + 389 \\ \hline \end{array}$$

Finished Early?
Think of an idea for a children's book you would like to read, come up with a title, and draw the cover.

Math focuses on:

- ✓ Number Sense
- ✓ Geometry
- ✓ Operations (including word problems)


EARLY FINISHERS WILL STILL STAY BUSY


Week 2

How are you feeling today?


happy sad tired angry sick silly


Write the long vowel word that matches each picture.

 _____

 _____

Add the correct letters to complete each word.


 h _ se

 cr _ n

Add details (at least two) to expand the simple sentence.

Karl is hungry.

Write a repeated addition equation that matches the picture. Then solve.



Measure an item in the room using inches and centimeters. Then find the difference between the two.

Item	
Length in inches	
Length in cm	
Difference	

Draw a model with base ten blocks that matches the equation. Solve it.
(Use squares for 100s, lines for 10s, and dots for ones.)

$284 + 109 = \underline{\quad}$

Finished Early?
Create a new ice cream flavor and design its packaging.

Every page has:

Finished Early questions are on every page! Students will be asked to list or draw. It's fun and promotes higher level thinking!