

# START YOUR MORNINGS OFF RIGHT

Easily train your students to work for the first 10 minutes of the day on spiral review problems!

The worksheet is titled "Week 1 Practice writing the letter -R-". It contains several sections:

- Letter Practice:** A row of uppercase "R"s and a row of lowercase "r"s.
- Suffixes:** "Choose the correct suffix to make the word plural. Then write the new word on the line below." Below "bus" are two options: "s" (circled) and "es" (circled). Below "buses" is a blank line.
- Image and Attributes:** A drawing of a cylindrical object with a shaded end. To its right are two options: "hard" (circled) and "soft" (circled).
- Punctuation:** "Add the correct punctuation to the end of the sentence." Below is the sentence "When do we have to leave for school?" with a blank line for punctuation.
- Fact Family:** "Complete the addition/subtraction Fact Family." Below are two equations:  $39 + 12 = 51$  and  $51 - 39 = 12$ .
- Picture Graph:** "Create a picture graph from the data. Popcorn bought!" Below is a table with columns for "caramel", "cheese", "chili", and "plain", and rows for "2 people", "3 people", "1 person", and "1 person". The "caramel" row has 3 orange squares, "cheese" has 3 red squares, "chili" has 2 purple squares, and "plain" has 2 blue squares.
- Word Problem:** "Solve the problem. Show your work. James has 125 stickers in his sticker book. He gives some to his sister. Now he has 107 stickers. How many did he give to his sister?" Below is the equation  $125 - 107 = 18$ .
- Writing Prompt:** "Finished Early? I would like to live in a treehouse. I would want to live in a treehouse because I could watch birds in their nest. It would be fun to see chicks." Below is a blank line for the student to write why or why not.

# JANUARY SCOPE & SEQUENCE

Each week  
has new skills for:

- ★ Phonemic Awareness
- ★ Phonics
- ★ Language
- ★ Number Sense
- ★ Geometry
- ★ Operations (Word Problems)

*April*  
**End-of-2nd Grade Skills**

	Week 1	Week 2	Week 3	Week 4
<b>Phonics</b>	Using common suffixes (-s vs. -es) RF.2.3.D	Using common suffixes (-ed, -ing) RF.2.3.D	Plural or Possessive RF.2.2.C	Plural or Possessive RF.2.2.C
<b>Language (Conventions)</b>	Real-life Connections L.2.5.A	Real-life Connections L.2.5.A	Using dictionaries L.2.4.E	Using dictionaries L.2.4.E
<b>Grammar</b>	Punctuation Review L.1.2.5 & L.2.2.B	Irregular Nouns Review L.2.1.5	Irregular Verbs Review L.2.1.D	Adjectives & Adverbs Review L.2.1.E
<b>Number Sense</b>	Addition/Subtraction Relationship 2.NBT.7	Addition/Subtraction Relationship 2.NBT.7	Comparing Numbers Review 2.NBT.A.4	Place Value Review (100/forms) 2.NBT.A.1 & 2.NBT.A.3
<b>Geometry &amp; Measurement</b>	Draw Picture Graphs 2.MD.D.10	Read Picture Graphs 2.MD.D.10		
<b>Operations (Equations &amp; Word Problems)</b>	Solving Problems with an Unknown 2.OA.A.1			

**ALIGNED TO  
2ND GRADE  
COMMON CORE  
STANDARDS**

# YOU GET...

## 20 PAGES + 2 REVIEW

You get 4 weeks worth of review pages with 5 pages per week.


There are 2 review pages that you can add for longer months or as an assessment!

**Review 1** Practice writing how you're feeling.

Choose the correct suffix to make the word plural. Then write the new word on the line below.


crash  s  es

Choose the correct word to describe the item in the image.




spicy  mild

Write the correct plural form of the word below.



Answer the questions based on the information in the picture.



Compare the two numbers by writing the correct symbol in the circle.

**Review 2** Practice writing the day's weather.

Write the plural or possessive form of the noun in parentheses. Then select if it is plural or possessive.


It's time for \_\_\_\_\_ birthday party! (Jerry)

plural  possessive

Use the dictionary to look up the word below. Then fill in the chart with the correct information.

Word	invincible
Part of speech	
Definition	

Write the past tense form of the irregular verb.




(grow)

Complete the chart with the standard, expanded, and word forms of each number.

Standard	Expanded	Word
793		
528		

Answer the questions based on the information in the picture graph.



How much total money was raised?

What is the value of the digit in the tens place?

**832**

Solve the problem.

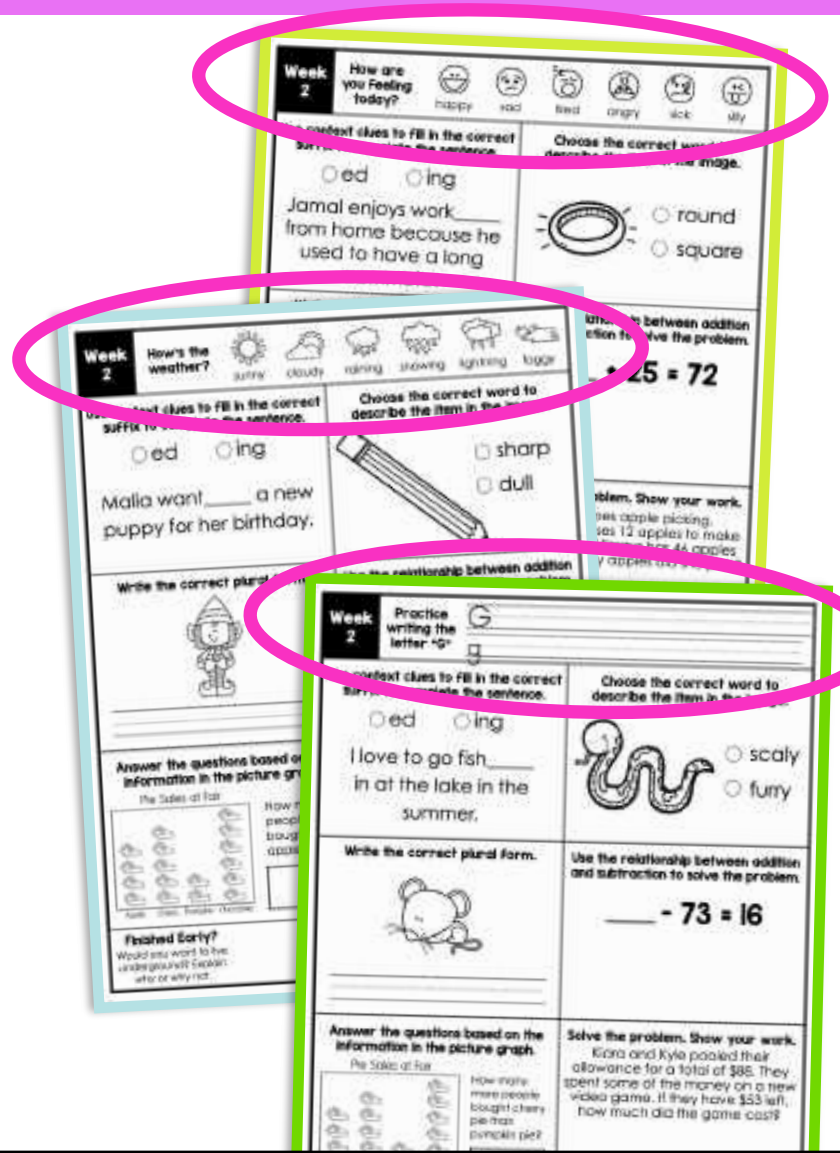
The pet store has 18 fish.

**ANSWER KEYS ARE INCLUDED TOO!**

# EACH PAGE HAS A FRIENDLY OPENER

Success for all students with:

- ★ Assessing the weather
- ★ Social Emotional Feelings Check-In
- ★ Brushing up on their Penmanship



# 3 ELA PROBLEMS

Students practice the same skill for 5 days!

**Week 4** Practice writing the letter "A"

Write the plural or possessive form of the noun in parenthesis. Then select if it is plural or possessive.

The \_\_\_\_\_ anchor was very heavy. (boat)

plural  possessive

Use the dictionary to look up the word below. Then fill in the chart with the correct information.

Word	initiate
Part of speech	
Definition	

Underline the adjective and circle the adverb in the sentence.

Your drawing is beautiful and so carefully painted!

What is the value of the digit in the ones place?

**593**

Solve the problem. Show your work.

The shelter has three pens with 6 puppies in each. If 9 puppies are adopted, how many puppies are left?

Find the difference between the most and least favorite fruits.

Fruit	1	2	3	4	5	6	7	8	9	10
STRAWBERRIES										
ORANGES										
APPLES										

**Finished Early?**  
Describe your favorite activity to do with your family or friends. Explain why it's your favorite.

ELA focuses on:

- ✓ Phonemic Awareness
- ✓ Phonics
- ✓ Language

# 3 MATH PROBLEMS

Students practice the same skill for 5 days!

**Week 4** Practice writing the letter "A" A  
a

Write the plural or possessive form of the noun in parenthesis. Then select if it is plural or possessive.

The \_\_\_\_\_ anchor was very heavy. (boat)

plural  possessive

Use the dictionary to look up the word below. Then fill in the chart with the correct information.

Word	initiate
Part of speech	
Definition	

Underline the adjective and circle the adverb in the sentence.

Your drawing is beautiful and so carefully painted!

What is the value of the digit in the ones place?

**593**

Answer the questions based on the information in the graph.

STRAWBERRIES	APPLES
10	10
8	8
6	6
4	4
2	2
0	0

Find the difference between the most and least favorite fruits.

Solve the problem. Show your work.

The shelter has three pens with 6 puppies in each. If 9 puppies are adopted, how many puppies are left?

**Finished Early?**  
Describe your favorite activity to do with your family or friends. Explain why it's your favorite.

Math focuses on:

- ✓ Number Sense
- ✓ Geometry
- ✓ Operations (including word problems)

# EARLY FINISHERS WILL STILL STAY BUSY

**Week 2** How are you feeling today?


happy sad tired angry sick silly

Use context clues to fill in the correct suffix to complete the sentence.


ed    ing

Charlie always enjoy \_\_\_\_\_ going on vacation with his family.

Choose the correct word to describe the item in the image.

  scaly  
 furry

Write the correct plural form.



\_\_\_\_\_

Use the relationship between addition and subtraction to solve the problem.

$$372 - \underline{\quad} = 183$$

Answer the questions based on the information in the picture graph.

Trees in the Park

Tree Type	Count
Oak	5
Maple	3
Elm	4
Decid.	2

How many elm trees are in the park?

\_\_\_\_\_

Solve the problem. Show your work.

Lisa counts 217 birds in her backyard in a month. If she counted 121 birds in the first two weeks, how many birds did she count in the second two weeks?

\_\_\_\_\_

**Finished Early?**  
Design a pair of sunglasses and describe your design choices.

Every page has:

Finished Early questions are on every page! Students will be asked to list or draw. It's fun and promotes higher level thinking!