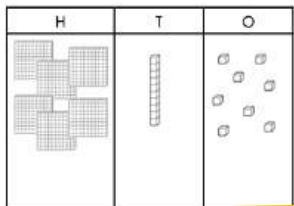


40 PAGES TO PRACTICE

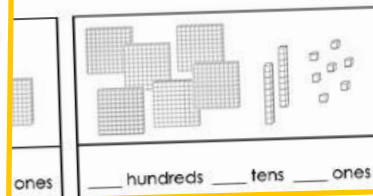
Counting Hundreds, Tens and Ones 2

Directions: Count the hundreds, tens and ones. How many blocks are there?



Hundreds, Tens & Ones Expanded Form 9

Directions: Count the hundreds, tens and ones. Write the number in




Counting Hundreds, Tens and Ones 14

Directions: Count the base ten blocks and write the number.



Color Hundreds, Tens and Ones 23

Directions: Color the hundreds, tens and ones to show each number.



Matching Hundreds, Tens and Ones 19

Directions: Match the base ten blocks and the number.



162

594

Hundreds, Tens and Ones Mix 28

Directions: Color the hundreds, tens and ones, then write the number in expanded form.

Number	Base Ten Blocks	Expanded Form

Guess Who? 32

Directions: Use the clue to match the number with the character.

I have 7 hundreds and 8 ones. Who am I?

443 unicorn

I have 8 hundreds and 9 tens. Who am I?

857 robot

I have 4 hundreds, 4 tens and 3 ones. Who am I?

619 king

I have 3 hundreds, 9 tens and 2 ones. Who am I?

890 puppy

Draw and Write Mixed 37

Directions: Fill out each column to represent the number shown.

#	Drawing	Hundreds, Tens, Ones	Expanded Form
539		5 hundreds, 3 tens, 9 ones	$500 + 30 + 9 = 539$
90			
816			

THE TENS ARE IN DIFFERENT DIRECTIONS

Get your students comfortable seeing the tens in different spots.

Tens can be side ways or after the ones blocks.

Doesn't matter...

13
Counting Hundreds, Tens and Ones
Directions: Count the base ten blocks and write the number.

12
Counting Hundreds, Tens and Ones
Directions: Count the base ten blocks and write the number.

PRACTICE COUNTING 10 ONES AS TEN

In some problems the ones will total ten.

Student will have to know that ten ones is equal to one ten.

Matching Hundreds, Tens and Ones 16

Directions: Match the base ten blocks and the number.

The worksheet contains the following base ten blocks and numbers:

Base Ten Blocks	Number
3 hundreds, 0 tens, 6 ones	306
1 hundred, 0 tens, 7 ones	107
2 hundreds, 4 tens, 4 ones	244
4 tens, 0 hundreds, 6 ones	200
5 hundreds, 4 tens, 0 ones	540
5 hundreds, 1 ten, 8 ones	518
3 hundreds, 1 ten, 0 ones	310
2 hundreds, 9 tens, 0 ones	290

© Grass Root Classroom Teaching Pay/Coaches

DIFFERENTIATED SUPPORT

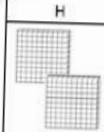
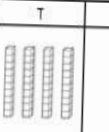

There are 5 pages per skill.

The first two pages have a sample problem filled out!

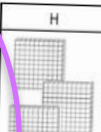
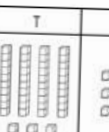

Provide extra support for the students that need the sample.

Counting Hundreds, Tens and Ones **1**

Directions: Count the hundreds. Then count the tens. Then count the ones. How many blocks are there?

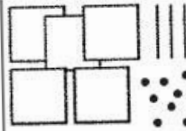
H	T	O
		
2 hundreds	4 tens	3 ones

243

H	T	O
		
_____ hundreds	_____ tens	_____ ones

Draw and Write Mixed **37**

Directions: Fill out each column to represent the number shown.

Number	Drawing	Hundreds, Tens, Ones	Expanded Form
539		5 hundreds, 3 tens, 9 ones	$500 + 30 + 9 = 539$
90			
816			
263			