

END OF YEAR

REVIEW

Math Task Cards
Second Grade

by: A Grace-Filled Classroom



E

Compare the numbers.

a. 378 and 389

b. 455 and 455

c. 821 and 745



F

What time is it?



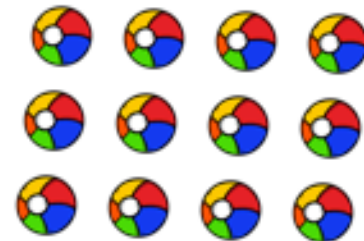
G

Count the money.



H

Write an addition sentence and then add.



U Estimate how long each bar is in inches and then measure them.
How much longer is the red bar than the yellow bar?



V How many tens are there in 300?



W Mentally subtract:

a. $45 - 12 =$

b. $69 - 43 =$

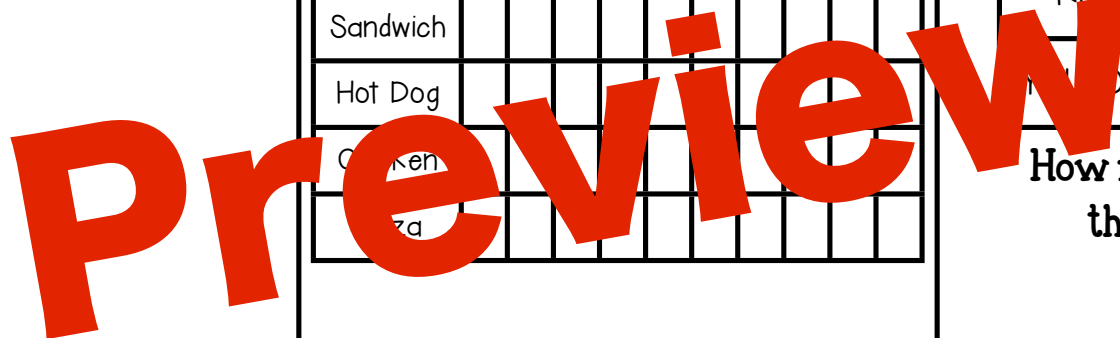
c. $80 - 54 =$



Jamie hit the ball 22 feet.
Marcus hit the ball 43 feet.
How much further did Marcus hit the ball?



RECORDING SHEET



S

a.

b.

C.

T

Sandwich	
Hot Dog	
Chicken	
Pizza	

Review

U

How much longer is red bar than the yellow bar?

V

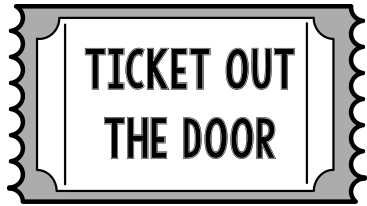
W

a.

b.

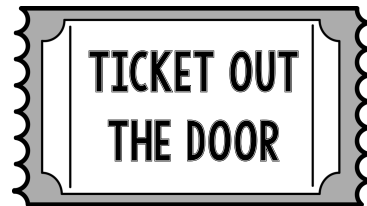
C.

X



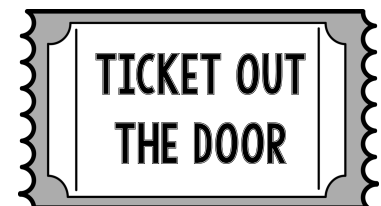
Name: _____

© A Grace-Filled Classroom 2015



Name: _____

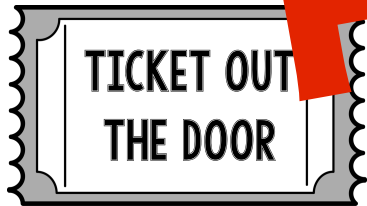
© A Grace-Filled Classroom 2015



Name: _____

© A Grace-Filled Classroom 2015

Preview



Name: _____

© A Grace-Filled Classroom 2015



Name: _____

© A Grace-Filled Classroom 2015




Name: _____

© A Grace-Filled Classroom 2015

Answer Key

End of Year Task Cards

RECORDING SHEET



Directions: Read each task card for instructions. Record your answer in the matching box. Remember sometimes there will be more than one answer.

A 779	B 371	C 7 centimeters
D 88	E a. $378 < 389$ b. $455 = 455$ c. $821 > 745$	F 1:05

Preview