

END OF YEAR

REVIEW

Math Task Cards

Third Grade

by: A Grace-Filled Classroom



E

Compare the numbers.

a. 378 and 389

b. 455 and 455

c. 821 and 745



F



a. What time is it?

b. What time will be
after 40 minutes?

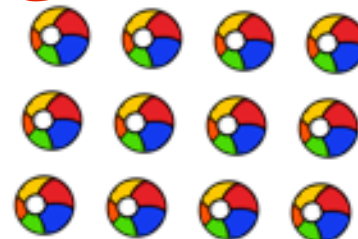
G

How much of the
fraction is shaded.




H

What is the multiplication
sentence and then multiply.




I Draw a number line starting at 0 and ending at 1 with 4 equal parts. Label each part of the number line as a fraction.



© 2015 Mrs. Green's First Grade Classroom

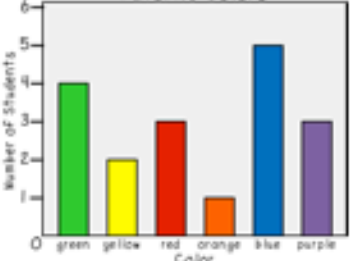
J Draw a square. Partition the square into 4 equal parts and shade in 2 parts. Write a fraction to go with it.



© 2015 Mrs. Green's First Grade Classroom

K

Favorite Colors



a. Which color was picked the most?
b. What is the difference between the people that chose green and yellow?

© 2015 Mrs. Green's First Grade Classroom

I


897 - 358 =



© 2015 Mrs. Green's First Grade Classroom

End of Year Task Cards

RECORDING SHEET




Directions: Read each task card for instructions. Record your answer in the matching box. Remember sometimes there will be more than one answer.

G	H	I <hr/>
J	K a. b.	L

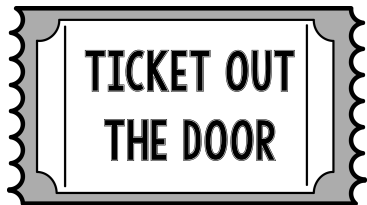
End of Year Task Cards

RECORDING SHEET



Directions: Read each task card for instructions. Record your answer in the matching box. Remember sometimes there will be more than one answer.

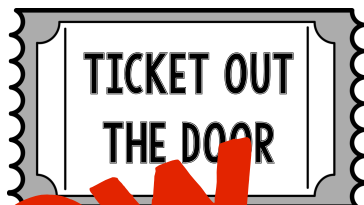
M a. b. c. d.	N a. b. c.	O
P a. b. c.	Q a. b.	R a. b. c. d.



Name: _____

Blank rectangular area for drawing or writing.

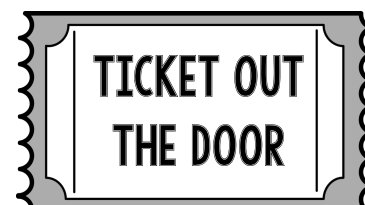
© A Grace-Filled Classroom 2015



Name: _____

Blank rectangular area for drawing or writing.

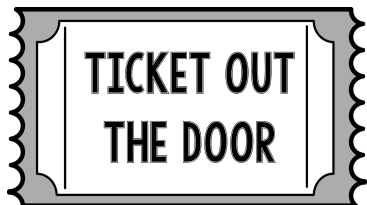
© A Grace-Filled Classroom 2015



Name: _____

Blank rectangular area for drawing or writing.

© A Grace-Filled Classroom 2015



Name: _____

Blank rectangular area for drawing or writing.

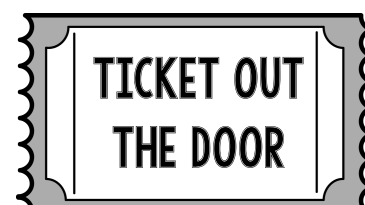
© A Grace-Filled Classroom 2015



Name: _____

Blank rectangular area for drawing or writing.

© A Grace-Filled Classroom 2015




Name: _____

Blank rectangular area for drawing or writing.

© A Grace-Filled Classroom 2015

End of Year Task Cards

RECORDING SHEET



Directions: Read each task card for instructions. Record your answer in the matching box. Remember sometimes there will be more than one answer.

G

$$\frac{3}{5}$$

H

$$3 \times 4 = 12$$

or

$$4 \times 3 = 12$$

I

$$\begin{array}{r} 0 \qquad \qquad \frac{1}{2} \qquad \qquad 1 \\ \hline \frac{0}{4} \quad \frac{1}{4} \quad \frac{2}{4} \quad \frac{3}{4} \quad \frac{4}{4} \end{array}$$

J



$$\frac{2}{4}$$

K

a. blue

b. $4 - 2 = 2$
2 people

L

539